

Time

Chapter 16

Name: _____ Class: _____ Date: _____

Worksheet 1

Telling Time to the Hour

1 Match.



5 o'clock



11 o'clock



2 o'clock



12 o'clock

2 Write the time shown on each clock.

Example



1 o'clock

(a)



(b)



(c)



(d)



(e)



(f)




(g)




- 3 The pictures show what Holly does during the holidays.
Write the time shown on each clock.

(a)




Holly wakes up at in the morning.

(b)




Holly goes for a walk in the park at in the morning.

(c)



Holly plays with her friends at in the afternoon.

(d)



Holly watches television at in the evening.