

1 Here are three glasses.



A



B



C

- Which glass is empty?
- Which glass is half full?
- Which glass is full?


2 Tommy has some milk in a glass.



Which glasses have more milk than Tommy's?




3 Eva, Ron and Amir have some juice.



This is my juice.

Eva



Shade the glasses to show how much juice Ron and Amir could have.



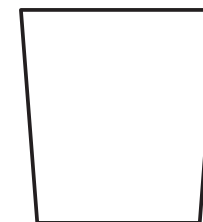
I have more juice than Eva.

Ron





I have less juice than Eva.

Amir



Compare answers with a partner.

4 Which fish tank contains less water?



5 Which object has the greater capacity?



Shade the glasses to show how much juice Ron and Amir could have.




I have more juice than Eva.

Ron



I have less juice than Eva.


Amir



Compare answers with a partner.



4 Which fish tank contains less water?



5 Which object has the greater capacity?

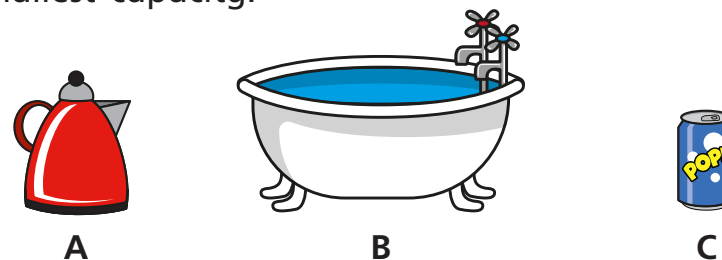


6 Which object has the greatest capacity?

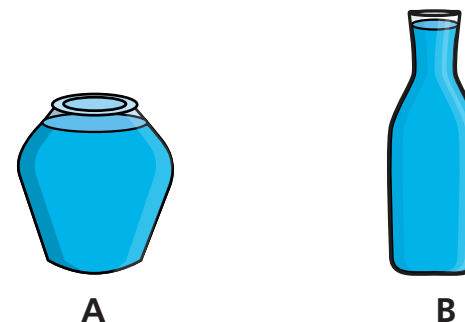


7 Put these objects in order of how much water they can hold.

Start with the object that has the smallest capacity.



8 Whitney says B contains more water than A.



Why might Whitney think this?
What could she do to check?

