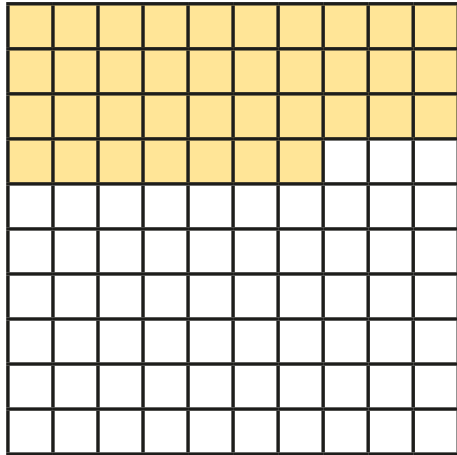


1 Here is a hundred square.

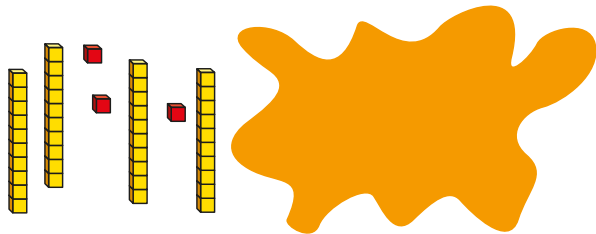


How many squares are shaded?

How many squares are not shaded?

$$\square + \square = 100$$


2 Eva has made 100 using base 10
She has spilt paint on it.



Draw the missing pieces of base 10




3 Mrs Harris has these apples for Sports Day.



She needs 100 apples.

How many more apples does Mrs Harris need?

4 Complete the bar model.



5 Complete the calculations.

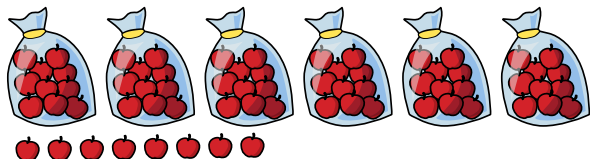
a) $40 + \square = 100$ e) $100 - 50 = \square$

b) $\square + 70 = 100$ f) $100 - 37 = \square$

c) $100 = \square + 72$ g) $\square = 100 - 22$

d) $100 = 28 + \square$ h) $8 = 100 - \square$


- 3 Mrs Harris has these apples for Sports Day.



She needs 100 apples.

How many more apples does Mrs Harris need?

- 4 Complete the bar model.



- 5 Complete the calculations.

a) $40 + \square = 100$

e) $100 - 50 = \square$

b) $\square + 70 = 100$

f) $100 - 37 = \square$

c) $100 = \square + 72$

g) $\square = 100 - 22$

d) $100 = 28 + \square$

h) $8 = 100 - \square$

- 6 A coat costs £100

Mr Farmer has £58

How much more money does Mr Farmer need to buy the coat?

- 7 Whitney is working out $38 + \square = 100$



The missing number is 72 because I need 2 more ones and 7 more tens.

Do you agree with Whitney?

Explain your answer

Talk about it with a partner.