

# Fluent in 5

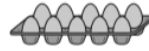
Tuesday

9 Match each egg box to the correct multiplication.

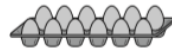
One is done for you.



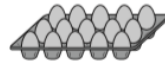
$6 \times 2$



$5 \times 3$



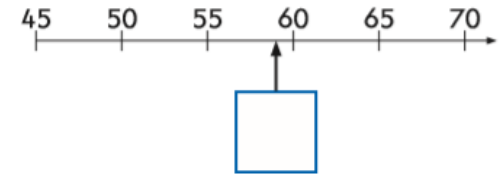
$3 \times 2$



$5 \times 5$

How many eggs are on the front row of each box.

14 Write the correct number in the box.



Look at the sequence of numbers, what steps are they counting in? If you already know 55 and 60, what is the nearest number to 60?

$10 + 20 =$

What will you count in?  
What number can you start from?

$3 + 10 + 3 =$

Which number will you start from?

Bigger number first, count on the 2 smaller numbers.

10 Sita puts 10 balls in each bag.

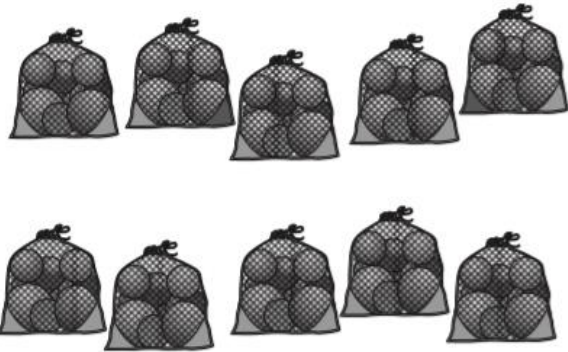


How many balls are in the bags **altogether**?

 balls

What will you be counting in?

10 Sita puts **10** balls in each bag.



How many balls are in the bags **altogether**?