

Friday

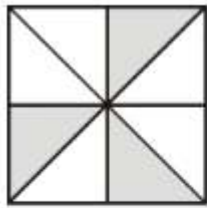
Lesson 5

Can you solve these challenge questions below?


- ❖ Remember to underline the important information and solve each problem one step at a time!

Each of these diagrams is divided into equal parts.

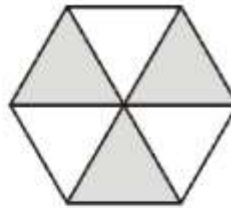
Some of the parts are shaded.



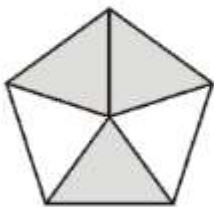
A



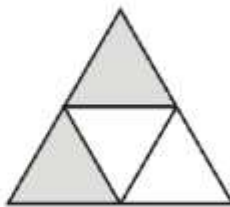
B



C



D



E

Write the letters of all the diagrams that have exactly  $\frac{1}{2}$  shaded.

\_\_\_\_\_

Tick (✓) each shape that is exactly  $\frac{1}{4}$  shaded.

Which of the diagrams has exactly  $\frac{1}{3}$  shaded?

\_\_\_\_\_

