

Tuesday

Lesson 2

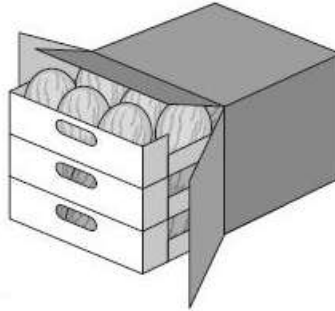
Can you solve these challenge questions below?

- ❖ Remember to underline the important information and solve each problem one step at a time!

A box contains trays of melons.


There are 15 melons in a tray.

There are 3 trays in a box.



A supermarket sells **40** boxes of melons.


How many melons does the supermarket sell?



Write the missing numbers to make this **multiplication** grid correct.

×	<input type="text"/>	<input type="text"/>
<input type="text"/>	63	54
<input type="text"/>	56	48

Chen uses these digit cards.



She makes a 2-digit number and a 1-digit number.

She multiplies them together.

Her answer is a **multiple of 10**

What could Chen's multiplication be?

$$\begin{array}{|c|c|} \hline \square & \square \\ \hline \end{array} \times \square$$

