

Monday

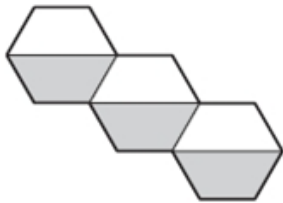
Lesson 1

Can you solve these challenge questions below?

- ❖ Remember to underline the important information and solve each problem one step at a time!

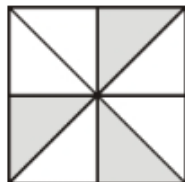
Here are three shapes made from regular hexagons.

Write the **fraction** of each shape that is shaded.




Each of these diagrams is divided into equal parts.

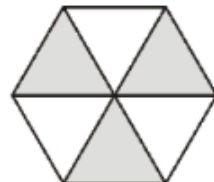
Some of the parts are shaded.



A



B



C



D



E

Write the letters of all the diagrams that have exactly $\frac{1}{2}$ shaded.

Which of the diagrams has exactly $\frac{1}{3}$ shaded?

