

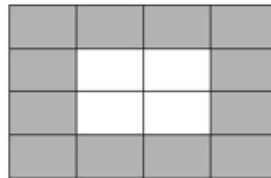

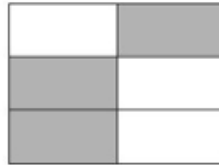

Tuesday

Lesson 2

Can you solve these challenge questions below?

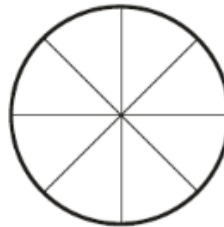
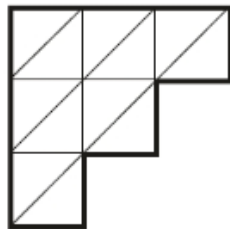
- ❖ Remember to underline the important information and solve each problem one step at a time!

Tick two shapes that have $\frac{3}{4}$ shaded.



Each diagram below is divided into equal sections.

Shade three-quarters of each diagram.



Shade more triangles on this shape so that is $\frac{1}{3}$ shaded

Shade $\frac{1}{5}$ of this shape.

