

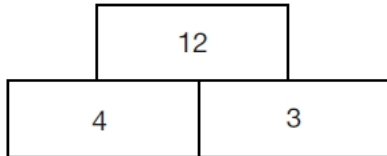
Tuesday

Lesson 2

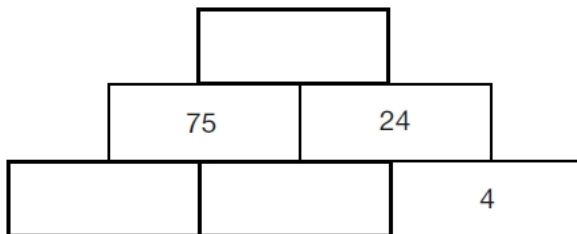
Can you solve these challenge questions below?

- ❖ Remember to underline the important information and solve each problem one step at a time!

In this tower, two numbers are **multiplied** to give the number above.



Write the missing numbers in the tower below to make it correct.



50 children need **two pencils** each.

There are 20 pencils in a box.

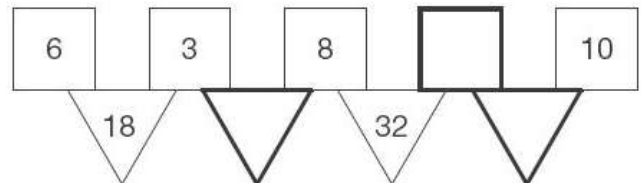


How many boxes of pencils are needed?

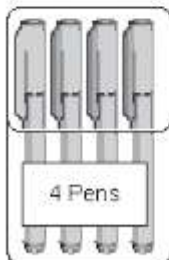
In this diagram the rule is

'to make the number in a triangle, multiply the numbers in the two squares above it'.

Write in the three missing numbers.



50 children need **one pen** each.



Pens are sold in packs of 4

How many packs of pens need to be bought?

