

1 Uma writes down a number.

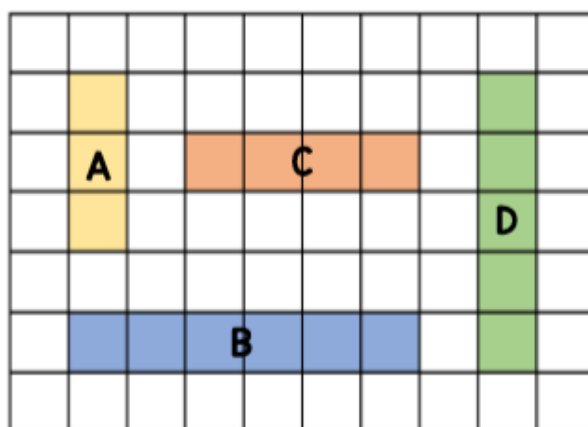
58

First she subtracts 2 from the number.

She then subtracts 2 tens from the number.


What is the sum of the digits in the new number?

2 Put the shaded bars in order of their lengths.

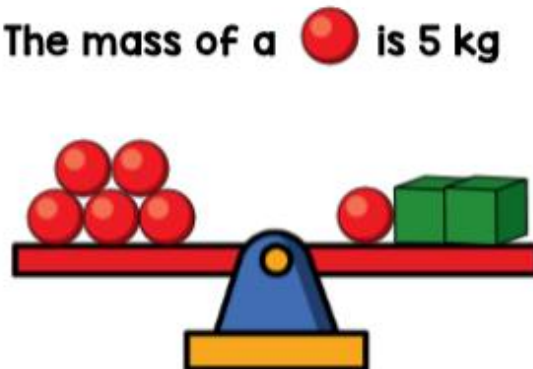


Start with the bar with the longest length.

1 Which item is the heaviest?



2 The mass of a red ball is 5 kg



What is the mass of a green cube?