

1 Uma writes down a number.

58

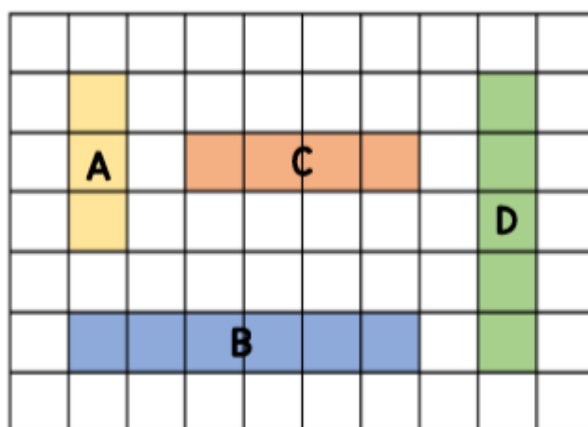
First she subtracts 2 from the number.

She then subtracts 2 tens from the number.

What is the sum of the digits in the new number?

The sum of the digits of her new number is 9


2 Put the shaded bars in order of their lengths.




Start with the bar with the longest length. B, D, C, A



1 Which item is the heaviest?



The present is the heaviest.

2 The mass of a  is 5 kg



What is the mass of a  ?

The mass of a cube is 10 kg.

