

Name: Asghar

5-a-day

Silver



22nd February

$$2,500 + 2,500 + 2,500$$

7500

$$\begin{array}{r} 213 \\ 4 \overline{) 852} \end{array}$$

213

Write down the number which is five less than three thousand and two.

$$\begin{array}{r} 3002 - 5 \\ \underline{-2} \quad \underline{-3} \\ 3002 \quad 3000 \quad 2997 \end{array}$$

2997

This table shows the temperature at 7am on three days in December

1st December	8th December	15th December
-1°C	5°C	-3°C

What is the difference between the temperatures on 1st December and 8th December?

6°C

On 22nd December the temperature was 6°C lower than on 15th December.

What was the temperature on 22nd December?

$$\underline{\underline{-3 - 6 = -9^\circ\text{C}}}$$

Name: AASMAN

5-a-day

Silver



23rd February

$$5 - 9$$

-4

$$\begin{array}{r} 0 \text{ } 7 \text{ } 9 \text{ } 7 \\ - \quad 9 \text{ } 4 \text{ } 8 \\ \hline 8 \text{ } 5 \text{ } 9 \end{array}$$

859

Gary buys four packets of crisps and pays with a £5 note



Here is his change



= £1.60

Work out the price of 1 packet of crisps

$$£5 \div 1.60 = £3.40$$

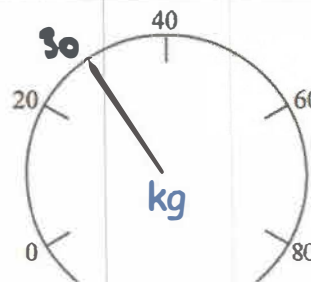
$$\begin{array}{r} 0.85 \\ 4 \overline{) 3.40} \\ \underline{4} \\ 0 \\ \underline{0} \\ 0 \\ \underline{0} \end{array}$$

85p

Hannah is 40kg **heavier** than Naomi.
The scales show Naomi's weight.

How heavy is Hannah?

$$30 + 40 = \underline{\underline{70 \text{ kg}}}$$



Louisa is reading a book.

She has reached **chapter XXIV**

Write XXIV in **figures**

24

Name: Answer

5-a-day

Silver



24th February

$1,560 - 444$

$$\begin{array}{r} ^5 ^1 \\ 1560 \\ - 444 \\ \hline 1116 \end{array}$$

1116

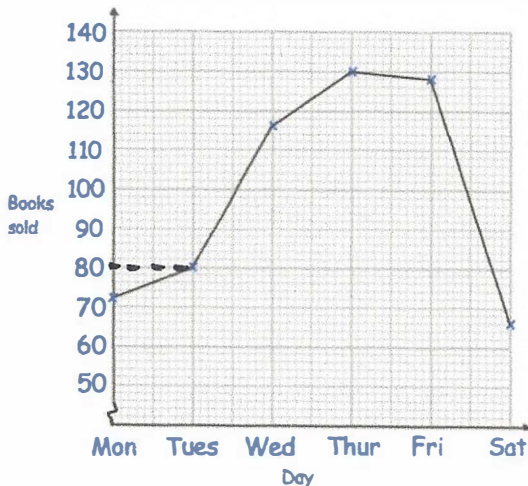
$108 \div 12$

9

The distance across Earth is 12,742km

Write 12,742 in words

Twelve thousand, seven hundred and forty two



On which day were the most books sold?

Thursday

On which day were 80 books sold in total?

Tuesday

Name: Angela

5-a-day

Silver



25th February

$$\frac{7}{15} + \frac{4}{15}$$


$$\frac{11}{15}$$

$$6,000 - \square = 758$$

$$\begin{array}{r} 5 \cancel{0}^9 \cancel{0}^9 \cancel{0}^9 \\ - \quad 758 \\ \hline 5242 \end{array}$$

$$5242$$

Draw all the lines of symmetry onto the arrow



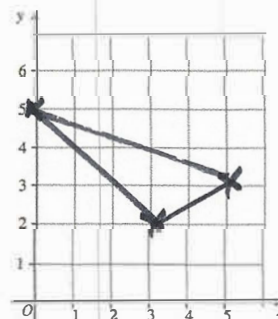
Find the missing two numbers

$$\begin{array}{ccccccc} & +25 & & +25 & & +25 & & +25 \\ & \underbrace{} & & \underbrace{} & & \underbrace{} & & \underbrace{} \\ 78 & 103 & 128 & \boxed{153} & \boxed{178} & & & \end{array}$$

Plot the points

(3, 3) (5, 3) (0, 5)

Join the points to make a triangle



Name: Answer

5-a-day

Silver



26th February

$6 \times 5 \times 15$

$6 \times 5 = 30$

30×15

450

$4.7 + 6.8$

$$\begin{array}{r} 4.7 \\ + 6.8 \\ \hline 11.5 \end{array}$$

11.5

Round 671 to the nearest hundred

700

Round 3189 to the nearest thousand


3000

A tin has 120 cookies inside.

8 children each take 6 cookies.

How many cookies are left in the tin?

$8 \times 6 = 48$



$$\begin{array}{r} 120 \\ - 48 \\ \hline 72 \end{array}$$

$120 - 48 = 72$

What is 135 minutes in hours and minutes?

$2 \text{ hours} = 120 \text{ minutes}$

2 hours 15 minutes