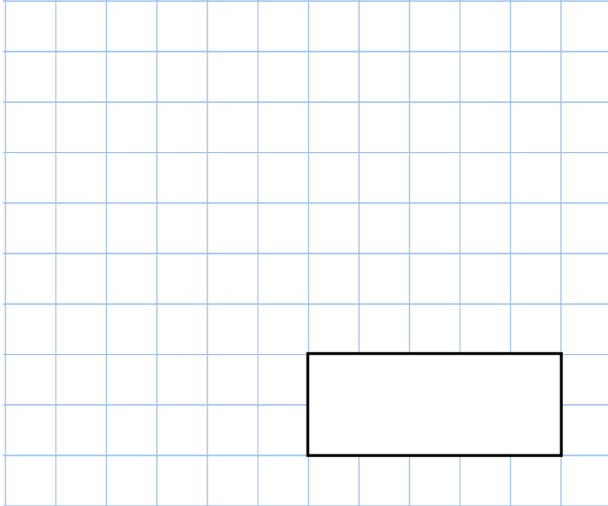
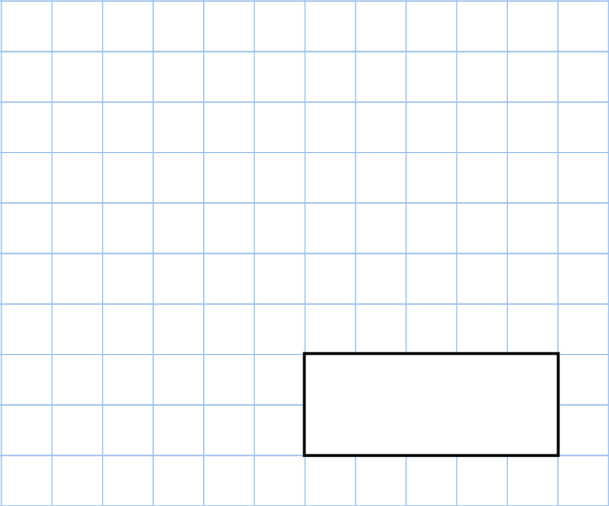









24th February	
$2^3$ 	$235 \times 50$ 
<p>In a crate, there are 40 apples.</p> <p>3 of the apples are bad.</p> <p>What fraction of apples in the crate are good?</p>	
<p>Draw an <math>80^\circ</math> angle</p>	
<p>The input is the same as the output</p> <p>Find the input</p>	<p>input <math>\rightarrow</math> <span style="border: 1px solid black; padding: 2px;">multiply by 3</span> <math>\rightarrow</math> <span style="border: 1px solid black; padding: 2px;">subtract 14</span> <math>\rightarrow</math> output</p>



